

ข้อสอบวัดสมิทธิภาพทางภาษาอังกฤษ ตามมาตรฐาน (CEFR)  
 ระดับปริญญาตรีสายเทคโนโลยีหรือสายปฏิบัติการ สถาบันอาชีวศึกษาภาคตะวันออกเฉียงเหนือ 1  
 ประเภทวิชา อุตสาหกรรม

Choose the correct answer

1. What do you do to make a living?
  - a. I work full time
  - b. I work 6 days a week
  - c. I am a computer programmer
  - d. I get a wonderful job
2. An Assembler is a person who.....assembling jobs.
  - a. work
  - b. does
  - c. works
  - d. d. do

**No. 3 – 5 Complete the dialogue**

Mr. A: I see from your resume that you are very experienced.

Mr. B: Yes I've worked as an electrical engineer for 10 years now. But I think it is a good career move to.....(3).....your company.

Mr. A: Why did you leave your former company?

Mr. B: It was.....(4).....job.

Mr. A: Yes our company is large and there is plenty of room for advancement.

Mr. B: So you'll give me the job?

Mr. A: Yes, but for the first month you will be on probation with half-pay. After that you will be a full employee of the company. ....(5).....?

Mr. B: What is the salary?

Mr. A: 50 k per year

Mr. B: Sounds good.....

3.
  - a. joy
  - b. joining
  - c. join
  - d. adjoin
4.
  - a. a dead end
  - b. a wonderful
  - c. marvelous
  - d. an excellent

5. a. Do you agree  
b. What do you think  
c. Any question  
d. Any suggestion

**Item 6 – 9 Choose the correct response to the conversation below.**

**Natalie:** Good morning, Mr. Parker.

**Henry:** Good morning, Ms. Green. How are you today?

**Natalie:** I \_\_\_\_\_ 6 \_\_\_\_\_. What about you?

**Henry:** I'm fine, thank you. \_\_\_\_\_ 7 \_\_\_\_\_ to your first day in our company.  
Joanna will \_\_\_\_\_ 8 \_\_\_\_\_ you to the team.

**Natalie:** Thank you very much Mr. Parker.

**Henry :** \_\_\_\_\_ 9 \_\_\_\_\_ have you on our team Ms. Green

- 6 .a. am doing great.      b. I is fine, thank you.      c. I don't worry.      d. I am not here.
7. a. Glad to see      b. Nice to know      c. Welcome      d. Happy
8. a. talk      b. see      c. meet      d. introduce
9. a. Good      b. Glad to      c. Invite      d. Please
10. I'm afraid we will have to ..... tomorrow's meeting
- a. put off      c. take a rain check for  
b. postpone      d. charge of
11. I hope that staff will not find the new shift working timetable.....
- a. too much hassle      c. too difficult.  
b. too much of a pain      d. too inconvenient.
12. We will need to examine the situation, in order to..... What can be done to rectify it.
- a. pull out      c. scope out  
b. establish      d. update
13. This offer of employment is made subject to the provision of ..... references
- a. satisfactory      c. stoking  
b. awesome      d. budget
14. I am ..... to have the opportunity to work with your company.
- a. very grateful      c. made up  
b. over the moon      d. worry

**From number 15 – 19 Read the sentence and identify the purpose of each sentence.**

15. I'm sorry to say that I'm very disappointed with.....

- a. Apologizing
- b. Disagreeing
- c. complaining
- d. Thanking

16. That's a wonderful idea.....

- a. Disagreeing
- b. Agreeing
- c. Criticizing
- d. Giving advice

17. What about.....?

- a. Comparing
- b. Making suggesting
- c. Complaining
- d. Persuading

18. I see what you mean, but.....

- a. Complaining
- b. Interrupting
- c. Thanking
- d. Disagreeing

19. In the first picture,.....but in the second one.....

- a. Comparing
- b. Apologizing
- c. Disagreeing
- d. Agreeing

20. A: What are your main responsibilities?

B: I ..... the Sales Manager.

- a. work on
- b. report on
- c. work to
- d. report to

21. James is .....the sales team.

- a. in charge to
- b. in charge for
- c. in charge of
- d. in charge on

22. I am working \_\_\_\_\_ a project to produce a new product.

- a. on
- b. in
- c. for
- d. as

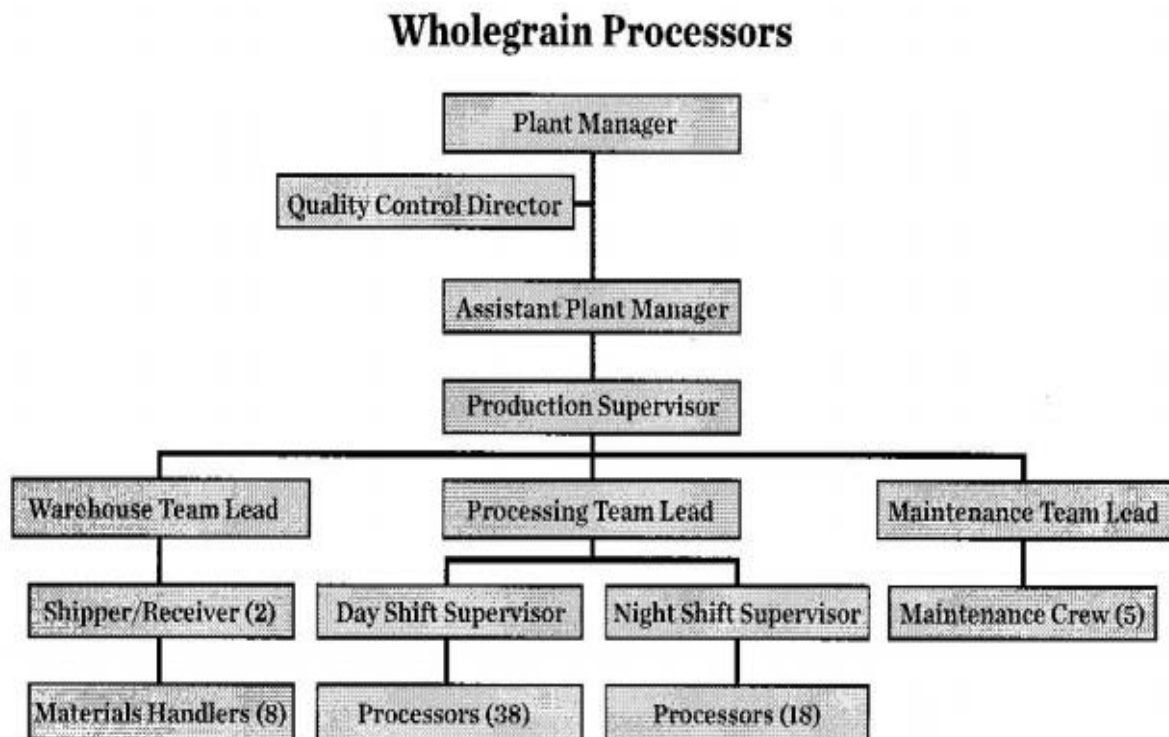
23. I work \_\_\_\_\_ a sales representative.

- a. on
- b. in
- c. for
- d. as

24. I hope I will be promoted \_\_\_\_\_ two or three years.

- a. On
- b. In
- c. for
- d. as

Instructions: Refer to the organizational chart to answer the questions below.



25. Wholegrain Processors organizes their production into three main departments. Name the departments.

- a. Warehouse team Lead, Shipper, Materials Handlers
- b. Warehouse team Lead, Processing Team Lead, Maintenance Team
- c. Plant Manager, Assistant Plant Manager, Production Supervisor
- d. Materials Handlers, Processors, Shipper

26. Who does the Quality Control Director report to?

- a. Production Supervisor
- b. Assistant Plant Manager
- c. Processors
- d. Plant Manager

27. How many shipper/ receivers work at Wholegrain Processor?

- a. 2
- b. 38
- c. 8
- d. 18

28. Who report to the production supervisor?

- a. Plant Manager
- b. Assistant Plant Manager
- c. Processing Team Lead
- d. Quality control director

29. How many processors report to the night shift supervisor?

- a. 2
- b. 38
- c. 8
- d. 18

**Read this passage and then answer the question. (For Item 30-34)**



**The United Nations Organization**

In 1945, representatives of 50 countries met in San Francisco at the United Nations Conference on International Organizations to the United Nations Charter. The United Nations was established on 24 October 1945 by 51 countries committed to preserving peace through international cooperation and collective security. Today, nearly every nation in the world belongs to the UN: membership now totals 189 countries.

All UN Member States are represented in the General Assembly — a kind of parliament of nations, which meets to consider the world's most pressing problems. Each Member State has one vote. Decisions on "important matters", such as international peace and security, admitting new members, the UN budget and the budget for peacekeeping, are decided by two-thirds majority. Other matters are decided by simple majority. In recent years, a special effort has been made to reach decisions through consensus, rather than by taking a formal vote.

The assembly holds its annual regular session from September to December. When necessary, it may hold a special or emergency session on subjects of particular concern. When the Assembly is not meeting, its six main committees, other subsidiary bodies and the UN Secretariat carry out its work.

30. When was the United Nations established?

- a. 1945
- b. 1950
- c. 1955
- d. 1960

31. How many countries are now members of the United Nations?

- a. 50
- b. 189
- c. 1945
- d. 24

32. Where are all United Nations Member States represented?

- a. San Francisco
- b. General Assembly
- c. USA.
- d. England

33. How many votes does each Member State have?

- a. one
- b. two
- c. three
- d. five

34. How are decisions on "important matters" taken?
- a. all members agreed
  - b. two-thirds majority
  - c. half of the member agreed
  - d. members from big countries agreed

**Read the passage and answer the questions. (For Item 35-39)**

“After you buy a new mobile phone and before you use the phone for the first time, you must charge the battery. It is very easy to do that. First of all, open the cover to the multifunction jack and plug the small end of the adapter into the multifunction jack. After that, plug the large end of the adapter into a power outlet. When the battery is fully charged the full icon is no longer moving. Then, unplug the adapter from the power outlet. Don't forget to unplug the adapter from the phone and close the cover to the multifunction jack.”

35. How many steps are there in this process?
- a. 2
  - b. 4
  - c. 3
  - d. 5
36. To charge the battery, .....should be opened.
- a. The phone
  - b. The cover
  - c. the adapter
  - d. the multifunction jack
37. When fully charged, .....should be unplugged from the power outlet.
- a. The adapter
  - b. The battery
  - c. the full icon
  - d. the cover
38. What is the purpose of this passage?
- a. to promote the phone battery sales
  - b. to require how to maintain a phone battery
  - c. to suggest how to charge a phone battery
  - d. to tell how to use a phone battery

39. What should be plugged into the multifunction jack?

- a. The large end of the adapter
- b. The small end of the adapter
- c. The power outlet
- d. The adapter

**Fill in the blanks with correcting words. (For Item 40-43)**

**Making Paper**

- a. is cut down
- b. are removed
- c. are heated
- d. are cut

First, the tree.....40..... Then, the branches .....41..... After that, the trunk is taken to the sawmill. Here, the bark is removed from the trunk and the trunks are sawn into logs. The logs are taken to the paper mill and placed in the shredder. Here they.....42.....into small strips and mixed with water. After that, they.....43.....and crushed.

**To put a new wheel on the car, What do you do?**



44. Put on the new wheel and .....the nuts.

- a. tighten
- b. disconnect
- c. lower
- d. put

45. Press the '.....' button on the remote control and ..... the car

- a. put/replace
- b. down/lower
- c. lower/ disconnect
- d. tighten/down

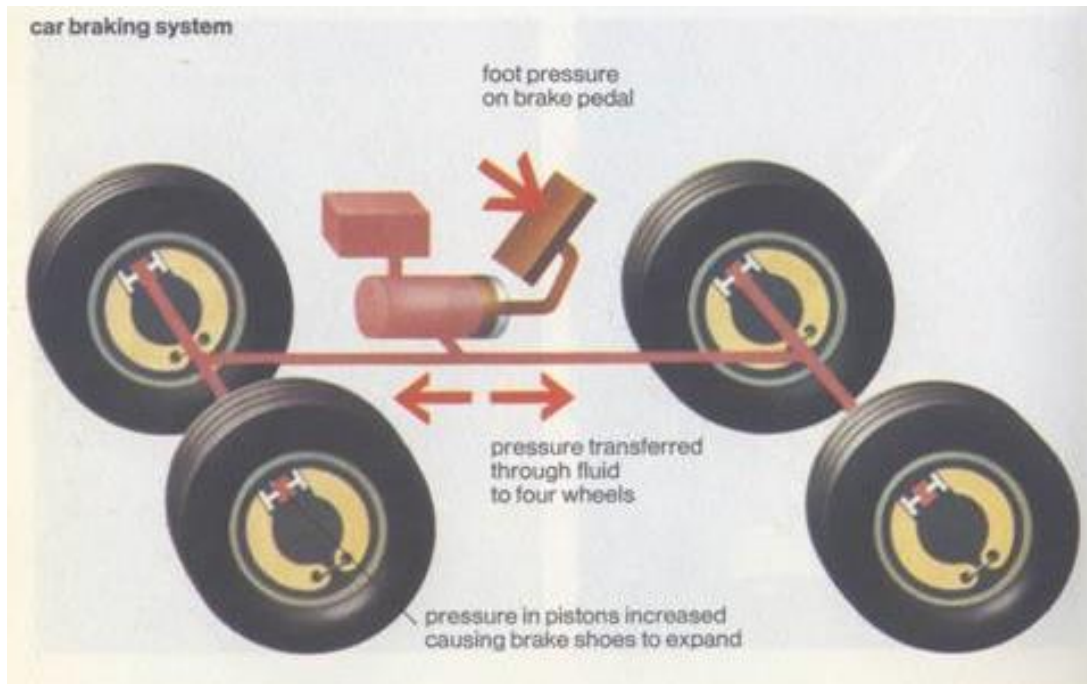
46. Remove the jack and ..... the cable.

- a. put
- b. replace
- c. disconnect
- d. tighten



47. Use the wrench to ..... the nuts. Turn them .....
- |                      |                  |
|----------------------|------------------|
| a. down/ disconnect  | c. put/replace   |
| b. tighten/clockwise | d. replace/lower |
- 48..... the hub cap on.
- |         |            |
|---------|------------|
| a. down | c. lower   |
| b. put  | d. tighten |

Read the description below and then choose the correct answer. (For Item 49-52)



The braking system of a car is a good example of how a hydraulic system works. When the brake pedal \_\_\_\_<sub>49</sub>\_\_\_\_ a piston operates which forces brake fluid out of the master cylinder and along four narrow pipes to the slave cylinders attached to the brake drums or discs \_\_\_\_<sub>50</sub>\_\_\_\_ the same pressure \_\_\_\_<sub>51</sub>\_\_\_\_ to the brakes in each wheel. This \_\_\_\_<sub>52</sub>\_\_\_\_ the car to a smooth halt. Provided the system is kept filled with brake fluid, hydraulic brakes work instantly because liquids can be compressed to any great extent.

If air leaks into the system, the brakes become much less efficient. This is because, unlike liquids, gases are compressible and some of the movement of the brake pedal is taken up in squeezing the air bubble.

(From: *The Penguin book of the physical world*. Penguin, 1976)

49. a. lift                      b. cycled                      c. is pressed                      d. pulled

50. a. and                      b. so that                      c. because                      d. therefore
51. a. is applied              b. related                      c. is fixed                      d. is kept
52. a. begins                  b. stops                        c. brings                        d. pushed

53. ....of the gift box is six inches.

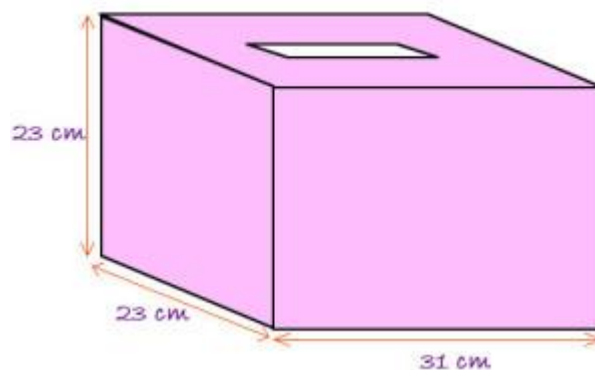
- a. The wide  
b. The widthness  
c. the widenness  
d. the width

54. What is the standard size of a ruler?

- a. It is 12 inches long  
b. It is long 12 inches  
c. It's wide 1 inch  
d. It has 12 inches long

Look at the box below and choose the best answer of questions 55 – 57

a.



55. What is the width of the box?

- a. 23 cm.                      b. 22 cm.                      c. 31 cm.                      d. none is correct

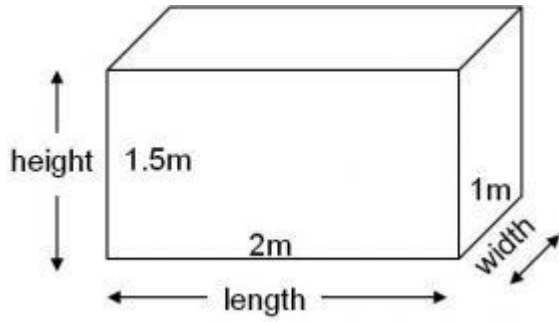
56. What is the length of the box?

- a. 23 cm.                      b. 22 cm.                      c. 31 cm.                      d. none is correct

57. What is the height of the box?

- a. 23 cm.                      b. 22 cm.                      c. 31 cm.                      d. none is correct

Look at the dimensions and measurements of the box below.



1

This box is 1.5 m high. Or it has the \_\_\_\_ 58 \_\_\_\_ of 1.5 m. Its length is \_\_\_\_ 59 \_\_\_\_\_. The width is 1 m. Or it \_\_\_\_ 60 \_\_\_\_ 1 m wide.

58. a. high                      b. height                      c. length                      d. long
59. a. long                      b. 1.5 m                      c. 1 m.                      d. 2 m
60. a. have                      b. has                      c. is                      d. are

Complete the text facts from the specification chart. (For Item 61-65)

### The Gherkin

Address: 30 St Mary Axe, London

Completion date: 2003

Height: 180 m

Floors: 40

Glass area: 24,000 sq m

Floor area: circle

Footprint: small

Number of lifts: 18

Speed of lifts: 6 m/s

Materials: reinforced concrete,  
steel, aluminum, glass

Width of glass lens: 2.4 metres

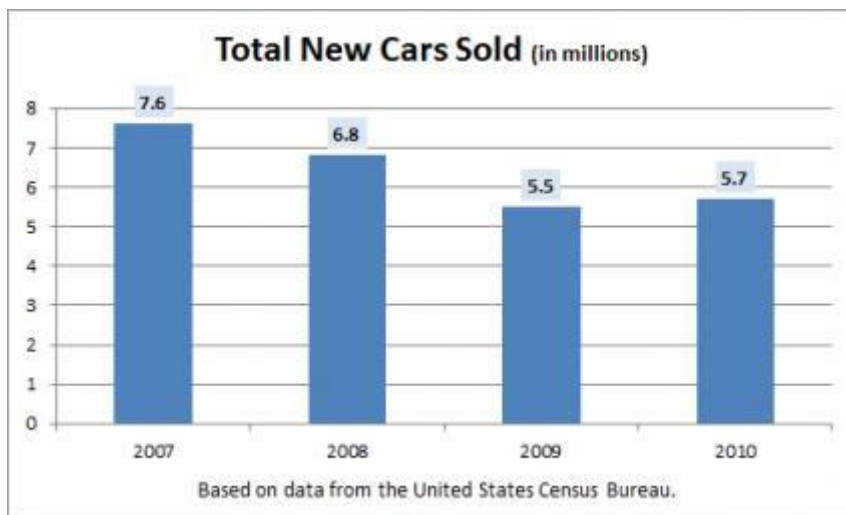


This building is called 'The Gherkin'. It was complete in 2003. The \_\_\_\_ 61 \_\_\_\_-storey building is \_\_\_\_ 62 \_\_\_\_ meters high. The building is made of reinforced concrete, steel, aluminum and glass. The glass windows have an area of \_\_\_\_ 63 \_\_\_\_ sqm. The building has

\_\_\_64\_\_\_ lifts. The floors in the middle of the building are bigger. The footprint of the building is small. All the glass on the side of the building is flat. But on the top of the building, there is one round glass lens. It is \_\_\_65\_\_\_ meters.

61. a. 18                      b. 6                      c. 2.4                      d. 40
62. a. 180                      b. 40                      c. 24,000                      d. 6
63. a. 2.4                      b. 40                      c. 2.4                      d. 24,000
64. a. 18                      b. 180                      c. 6                      d. 40
65. a. 18                      b. 6                      c. 2.4                      d. 40
66. Petrol prices.....to 5 million in 2014.
- a. rises
- b. rose
- c. rising
- d. rise
67. Each line on the graph..... the output of a different product.
- a. indicating
- b. indication
- c. indicates
- d. indicate

Read the following graph and answer the question (For Item 68-70)



68. Number of cars sold..... in 2008.
- a. doubled                      c. dropped
- b. picked up                      d. stayed the same

69. compare with 2009, number of cars sold.....in 2010.

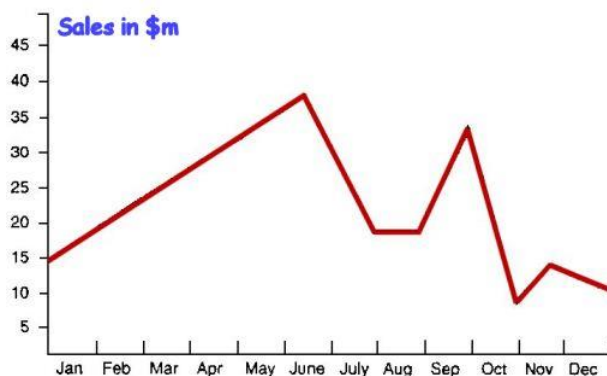
- |                      |                  |
|----------------------|------------------|
| a. Rose sharply      | c. rose slightly |
| b. Rose dramatically | d. rose suddenly |

70. Between 2008 and 2010, cars sold.....

- |                    |                      |
|--------------------|----------------------|
| a. remained stable | c. dropped gradually |
| b. fluctuated      | d. stabilized        |

**Item 71-76 Read the graph below. Then complete the description.**

This graph \_\_\_71\_\_\_ the twelve months of the past year. It may be seen clearly that sales \_\_\_72\_\_\_ steadily in the first half of the year (from January to May) and reached their \_\_\_73\_\_\_ in June. Then they dropped off in July and \_\_\_74\_\_\_ out in August. After rising sharply during September, they suffered a dramatic fall in \_\_\_75\_\_\_ but then made a significant recovery in November. However, the year ended with a slight \_\_\_76\_\_\_.

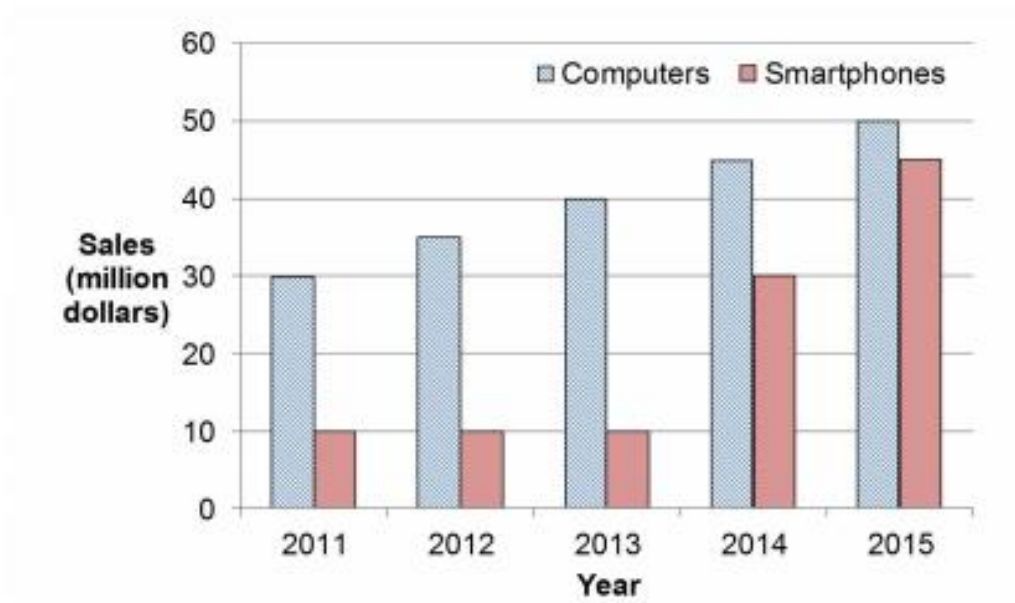


- |                 |             |              |             |
|-----------------|-------------|--------------|-------------|
| 71. a. grows    | b. shows    | c. rises     | d. drops    |
| 72. a. maintain | b. declined | c. decreased | d. rose     |
| 73. a. target   | b. point    | c. peak      | d. top      |
| 74. a. leveled  | b. showed   | c. fell      | d. rose     |
| 75. a. May      | b. June     | c. October   | d. November |
| 76. a. go up    | b. increase | c. decrease  | d. downturn |

**Study the Graph and answer the following question (Item 77-81)**

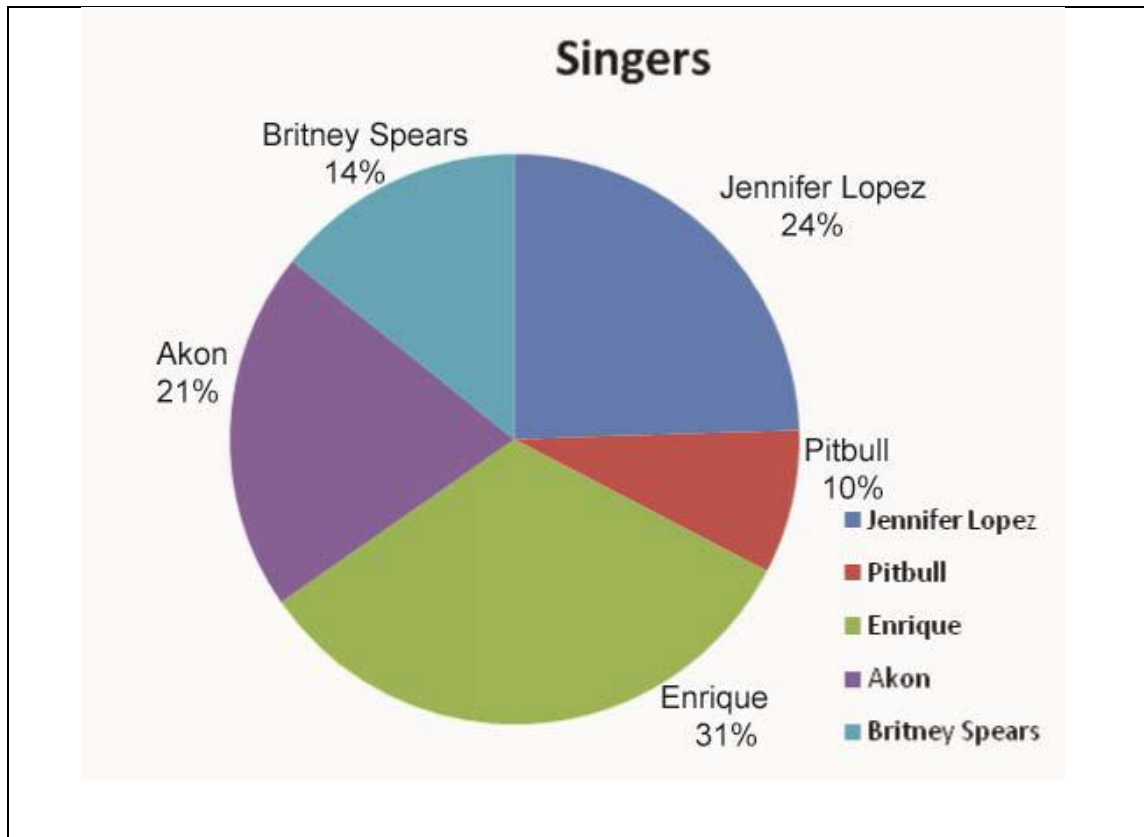
The bar chart shows the amount of money spent on two types of electronic items in country X.

Summarize the information in the chart by selecting and reporting the main features.  
Make comparisons where relevant.



77. The chart shows of ..... types of electronic item.  
 a. one  
 b. two  
 c. three  
 d. four
78. The graph shows spending over a ..... -year period.  
 a. five  
 b. four  
 c. three  
 d. three
79. The data shows sales from ..... to 2015.  
 a. 2012  
 b. 2014  
 c. 2011  
 d. 2015
80. Sales of both items .....  
 a. fell  
 b. remained level  
 c. increased  
 d. decreased
81. Sales of ..... remained level and then increased dramatically  
 a. computers  
 b. both  
 c. smartphones  
 d. none of them



Use the information from this graph to answer the following questions. Item 82-86



82. About what percent of singer popularity did Enrique receive?
- a. 24%      b. 13%      c. 31%      d. 6%
83. How many people voted for Akon?
- a. 21%      b. 31%      c. 23%      d. 21%
84. How far in front of Pitbull is Enrique?
- a. 14%      b. 21%      c. 11%      d. 6%
85. What percentage voted for Britney Spears as their favorite singer?
- a. 29%      b. 31%      c. 17%      d. 14%
86. How many people voted for Jennifer Lopez?
- a. 31%      b. 24%      c. 14%      d. 6%

87. ....is used to make a hole into a surface.
- A file
  - A driller
  - A hacksaw
  - A hammer
88. A screwdriver is used for.....screws into wood.
- cutting
  - cut
  - driving
  - drive
89. A C-Clamp is used to .....
- hold work pieces to a workbench.
  - hold a workbench to work pieces.
  - hang work pieces to a workbench.
  - hang a workbench to work pieces.
90. A hammer is used to.....
- cut pipes
  - check levels
  - grip wires
  - pull nails
91. The pencil is used to.....a line
- draw
  - write
  - drive
  - paint

**Item 92-96 Read the description about the kettle below and choose the correct answer.**

 	<p>A kettle is a metal container which is ____<sub>92</sub>____ boiling water. It consists of 4 main parts: a vessel, a lid, a spout and a handle. The vessel is 7 inches ____<sub>93</sub>____. It is hollow and spherical in shape. The base is flat and circular. It has a ____<sub>94</sub>____ of 6 inches. On the top of the vessel, there is a convex lid with the plastic knob in the middle. The lid is 5 inches in diameter. Above the lid is a curve ____<sub>95</sub>____ which is cover with plastic at the middle part. At the side of the vessel is a conical ____<sub>96</sub>____ for pouring water out of the vessel.</p>
---	---



92. a. used                      b. uses                      c. used for                      d. used to
93. a. wide                      b. high                      c. long                      d. thick
94. a. length                      b. thickness                      c. dimension                      d. diameter
95. a. shape                      b. line                      c. corner                      d. sharp
96. a. peak                      b. spout                      c. base                      d. vessel

97 . Lacquer is a special liquid.....

- a. That is used for making jewelry and ornaments, and as an international currency.
- b. Which is painted on wood or metal in order to protect it and to make it shiny.
- c. Made up of rectangular blocks of baked clay used for building walls
- d. Which forms the trunks and branches of trees.

98. Gold is a valuable, yellowed-colored metal.....

- a. That is used for making jewelry and ornaments, and as an international currency.
- b. Which is painted on wood or metal in order to protect it and to make it shiny.
- c. Made up of rectangular blocks of baked clay used for building walls
- d. Which forms the trunks and branches of trees.

99. Brick is the material.....

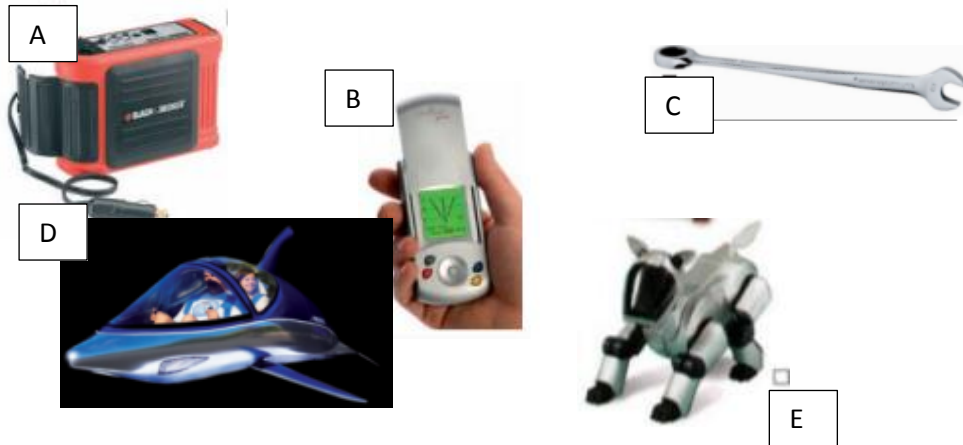
- a. That is used for making jewelry and ornaments, and as an international currency.
- b. Which is painted on wood or metal in order to protect it and to make it shiny.
- c. Made up of rectangular blocks of baked clay used for building walls
- d. Which forms the trunks and branches of trees.

100. Wood is the material.....

- a. That is used for making jewelry and ornaments, and as an international currency.
- b. Which is painted on wood or metal in order to protect it and to make it shiny.
- c. Made up of rectangular blocks of baked clay used for building walls
- d. Which forms the trunks and branches of trees.

101. Plaster is a smooth pasted made of sand, lime and water which goes hard when it dries,  
It is used to.....

- a. Which is painted on wood or metal in order to protect it and to make it shiny.
- b. Made up of rectangular blocks of baked clay used for building walls
- c. Which forms the trunks and branches of trees.
- d. Cover walls and ceilings and is also used to make sculptures.

For Item 102-106Read these advertisements and match the objects with their descriptions

102. Use the X-beam wrench for loosening tight and rusty old bolts without hurting your hand. The ends are at ninety degrees to each other, so you always grip a wide, flat surface, not a narrow edge.

- |      |      |
|------|------|
| a. A | c. C |
| b. B | d. D |

103. What do you do if your car battery goes flat in a storm, and you don't have jump leads or roadside assistance? The Black & Decker Simple Start allows you to start your car without getting wet. It plugs into the 12-volt socket in your car, and it's designed to restart your car in ten minutes.

- |      |      |
|------|------|
| a. D | c. A |
| b. E | d. C |

104. This is designed to jump, dive, roll and move over and under water at 30 mph using a 175-hp engine. Innespace Sea Breacher is a two-seat, 5-metre long, underwater vehicle, shaped like a dolphin. It acts as a jetski and as a fast submarine.

- |      |      |
|------|------|
| a. D | c. A |
| b. E | d. B |

105. Have you forgotten where you put your keys? Use this smart device to find them. Simply attach the electronic tag to your keys. Then, if you can't find them later, switch on Loc8tor, and it will point in the right direction – not only left or right, but up or down too. It will show you where your keys are. At the same time, the tag on your keys will emit a beeping sound.

- |      |      |
|------|------|
| a. B | c. A |
| b. C | d. E |

106. Sony designed this robot and it's an electronic pet. It's only 230 millimeters long, but it can travel over six meters a minute. It can play football and score goals too.

- |      |      |
|------|------|
| a. B | c. D |
| b. C | d. E |

107. I will.....by showing you some photos of the building site.

- |             |              |
|-------------|--------------|
| a. start up | c. start off |
| b. start on | d. start at  |

108. My talk should.....about 20 minutes. Please feel free to ask question at any time.

- |         |              |
|---------|--------------|
| a. go   | c. spent     |
| b. take | d. take time |

109. Let's.....to what we were discussing earlier.

- |            |             |
|------------|-------------|
| a. go back | c. go along |
| b. go up   | d. go for   |

110. I would like to.....how important advertising is for us.


- |              |              |
|--------------|--------------|
| a. point off | c. point on  |
| b. point up  | d. point out |

111. I'm afraid I'm not in a position to.....on that.

- |                 |                    |
|-----------------|--------------------|
| a. comment      | c. commenting      |
| b. commencement | d. none is correct |

Match the parts of the advertisement and the expressions below: (Item 112-116)

- a. Illustration    b. Body copy    c. Brand name    d. Slogan    e. LOGO

<h1>Kleenex</h1>	<p>112</p>
<p>Tissues For Every Day</p>	<p>113</p>
<div data-bbox="212 544 512 898">  </div> <div data-bbox="604 517 1064 696"> <p>These KLEENEX Facial Tissues have softness, strength and absorbency for your everyday needs.</p> </div> <div data-bbox="604 725 1064 804"> <p>The right size for anywhere in your home.</p> </div> <div data-bbox="604 893 1002 972"> <p>( Select below to see available designs. )</p> </div> <div data-bbox="604 1001 1074 1079"> <p>White, Blue, Green, Pink, Lavender, Yellow</p> </div>	<p>114</p>
<p>115</p>	<p>116</p>

Read this passage and then answer the questions.

### Business Meeting

**Gary:** Sam, could you review the results of the survey on leisure sporting activities again? We need to plan out our proposal for this Friday's business meeting.

**Sam:** Sure, Gary. I've summarized the results in the handout, broken down by consumer age groups and sporting activities. The survey was administered to 550 men and women between the ages of 18 and 55 years old, and the results have been compiled in the following age groups: 18 to 26, 27 to 35, 36 to 45, and 46 to 55. According to the results, the most active group involved in sporting activities are those between 18 and 26 years old, followed by those 36 to 45 years old.

**Gary:** Okay.

**Sam:** As far as particular sports are concerned, people in these two groups cited jogging as their favorite recreational sport followed by skiing, tennis, swimming, and cycling.

**Gary:** And what about these groups broke down by gender?

**Sam:** Oh, Gary thanks for bringing that up. Men appear to be slightly more active than women in the 18 to 26 year-old age group, but women seem more active in the other three groups.

**Gary:** Hmm. based on what you have said, I think we should consider targeting the 18 to 26 year-old age group more in the future. I also feel we should consider expanding our line of athletic shoes, particularly jogging and tennis foot ware. We also have to come up with a more appealing slogan aimed at this age group.

**Sam:** I see what you mean. However, when these results are compared with the survey carried out three years ago, we can see a growing trend among older consumers-- those 14, I mean 46 to 55--who are becoming more conscious and concerned about staying fit. I believe this trend will continue, so we should focus on this group instead.

**Gary:** I see your point. Well, let's meet again on Wednesday to iron out more of the details of this proposal.

117. What was the main focus of the survey?

- a. leisure sporting activities
- b. durability of sporting equipment
- c. average age of athletes
- d. Friday's business meeting

118. Which group seems to be most active in sports?

- a. 18-26
- b. 27-35
- c. 36-45
- d. 46-50

119. Which sport was cited as the third most popular?

- a. jogging
- b. tennis
- c. cycling
- d. swimming

120. What is NOT one of Gary's marketing strategies?


- a. target the 18 to 26 year-old age
- b. sell tennis rackets
- c. carry more athletic shoes
- d. all above

121. Why does Sam want to target the 46-55 age groups?

- a. They have more buying power.
- b. They are very health conscious.
- c. They tend to enjoy sport more.
- d. They have more budget.

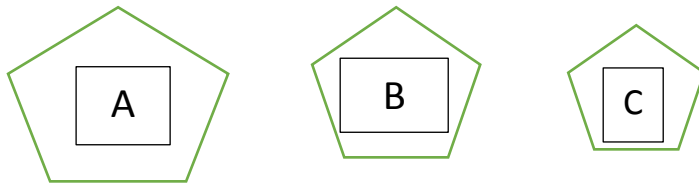
122. Which sentence describes the egg?

- a. The eggs are triangular in shape
- b. The eggs are oval in shape
- c. The eggs have an oval shape
- d. Both b and c are correct

123.  This can is .....

- a. rectangular
- b. triangular
- c. square
- d. cylindrical

Look at the picture the and answer the questions (For Item 124-126)



124. B is.....than A

- a. small
- b. tall
- c. smaller
- d. taller

125. C is.....

- a. The smaller
- b. The smallest
- c. the taller
- d. the tallest

126. A is.....

- a. The smallest
- b. The biggest
- c. the smaller
- d. the bigger

127. The recent worldwide increase in oil prices has led to a ----- demand for electric vehicles.
- a. greater
  - b. greatest
  - c. greatly
  - d. greatness
128. The China Wall is \_\_\_\_\_ wall in the world.
- a. long
  - b. more long
  - c. longer
  - d. the longest
129. Who is the \_\_\_\_ person you have ever spoken to?
- a. intelligent
  - b. more intelligent
  - c. intelligenter
  - d. most intelligent
130. This summer was much ..... last summer.
- a. hotter than
  - b. hotter than
  - c. the hottest
  - d. more hot
131. Did you know that crossing a busy street is ..... flying in an airplane?
- a. most dangerous than
  - b. more dangerous than
  - c. the more dangerous
  - d. the most dangerous than
132. Taking a taxi to work ..... than taking a bus to work.
- a. expensive
  - b. more expensive
  - c. is more expensive
  - d. the most expensive
133. Saturdays ..... Mondays because I don't have to go to school.
- a. are nicer than
  - b. are the nicest
  - c. is nicer than
  - d. is the nicest

134. Question number 15 was ..... Question number 14. Right?

- a. the easier
- b. easier than
- c. easier than
- d. easiest

**Read this dialogue and then answer the question. (For Item 135-139)**

<b>Jerry</b>	OK, so what do you think is the most useful invention then?
<b>Sandra</b>	What, in the world? Yeah, well, that's a difficult question! Hmm, I'm pretty sure I couldn't live without a television!
<b>Jerry</b>	Really?
<b>Sandra</b>	Yes, really! I mean, what would I do after school every day and at the weekends?
<b>Jerry</b>	But television is just entertainment, isn't it? Do you think it's useful?
<b>Sandra</b>	Well, yeah – it means we can learn about major news events. You know, with digital television and 24-hour channels, we can always find out what's happening in the world. Yeah, I think it's really useful. But anyway, what about you then? What invention do you think is the most useful?
<b>Jerry</b>	Hmm ... well, my computer means everything to me.
<b>Sandra</b>	Do you use it a lot?
<b>Jerry</b>	Yes, all the time. Yes, I'd certainly say it's the most useful invention in our house – even more useful than my mobile phone! You know, I do my homework on it, send emails to my friends, and visit websites and chat rooms.
<b>Sandra</b>	Do you have it in your bedroom?
<b>Jerry</b>	Well, no, it's in the study. You see, my mum and dad sometimes use it for work, too. And hey, if it crashes, we all get really annoyed!
<b>Sandra</b>	We haven't got a computer at home, so I don't use one much.
<b>Jerry</b>	Really, I can't imagine life without a computer!

135. What does Sandra think is the most useful invention?

- a. computer
- b. television
- c. mobile phone
- d. camera

136. How often does she use it?

- a. every day
- b. every week
- c. every month
- d. every year



137. In Jerry's opinion, what is the main purpose of TV?
- to kill the time
  - to watch movie
  - to watch the news
  - entertainment
138. In Sandra's opinion, which types of TV programs are very useful?
- movie
  - news
  - sport match
  - talk show
139. What is the most important thing that Jerry owns?
- mobile phone
  - television
  - computer
  - watch
140. You.....finish this project, or you might lose your job!
- should better
  - should had
  - should not
  - had better
141. Why not.....questions for your interview?
- prepare
  - preparing
  - to prepare
  - preparation
142. She.....be more careful when working on this machine.
- probably should
  - should probably not
  - probably should not
  - not probably should
143. A: I've been offered my dream job. However, it is far from my family and friends.  
.....
- B: You'd better take it.
- Should I go there?
  - Should I take the job?
  - I had to do it
  - I don't really like it.
144. A: I'm almost finished with school and I don't know what kind of job I want.....?

- B: Why don't you consult Ms. May. She can help you.
- Why should I do?
  - What do you like me to do?
  - What I should do?
  - What should I do?
145. A: I think you should buy the blue one.
- B: .....
- Sorry, I can't. I'm meeting a friend for dinner.
  - Sounds like a good idea. Where do you want to go?
  - Thanks for the advice, but I really need the money.
  - That's a good idea.
146. A: I don't think you should sell your car.
- B: .....
- Thanks for the advice, but I really need the money.
  - That's a good idea.
  - Thanks, but I've already been there.
  - No, I'd rather not.
147. A: Let's go bowling tonight.
- B: .....
- Sounds like a good idea. Where do you want to go?
  - No, I'd rather not.
  - Sorry, I can't. I'm meeting a friend for dinner.
  - Thanks, but I've already been there.
148. A: Why don't we go skiing on Saturday?
- B: .....
- Sorry, I can't. I'm meeting a friend for dinner.
  - Thanks, but I've already been there.
  - No, I'd rather not.
  - Sounds like a good idea. Where do you want to go?
149. A: Why don't you come with me to China?
- B: .....
- |                        |   |
|------------------------|---|
| a. No, I'd rather not. | c. Thanks, but that won't work          |
| b. That's a good idea. | d. Thanks, but I've already been there. |

**Read the article about giving advice and answer the question. (For Item 150-153)**

Lucy: Thank you for meeting with me during your lunch hour. I \_\_\_\_ (150) \_\_\_\_ it.

Monica: No problem. I'm happy to help. What's going on?

Lucy: Oh you know, the usual. \_\_\_\_ (151) \_\_\_\_ I take the new job?

Or do I stick with my current one?

Monica: Well, I think it's time for a change, don't you? They pay you late and you are unhappy.

Lucy: Do you really \_\_\_\_ (152) \_\_\_\_?

Monica: I know so. And I have been listening to your complain for over a year now. Trust me. \_\_\_\_ (153) \_\_\_\_ . What do you have to lose?



- |                       |                   |                    |                  |
|-----------------------|-------------------|--------------------|------------------|
| 150. a. like          | b. thank          | c. appreciate      | d. know          |
| 151. a. Can           | b. Will           | c. Should          | d. Did           |
| 152. a. think         | b. think so       | c. thought         | d. hope          |
| 153. a. Quit your job | b. Stop your work | c. Change your job | d. take your job |

**For Item 154-158**

**Match the offers with the situations using "Shall I.....?"**

154. What would you say if you are hungry?

- a. Shall I turn down the heating?
- b. Shall I order a pizza for you?
- c. Shall I iron it?
- d. Shall I turn off the radio?

155. What would you say if your shirt needs ironing?

- a. Shall I turn down the heating?
- b. Shall I order a pizza for you?
- c. Shall I iron it?
- d. Shall I turn off the radio?

156. What would you say if you want to study for the exam?

- a. Shall I turn down the heating?
- b. Shall I order a pizza for you?
- c. Shall I iron it?
- d. Shall I turn off the radio?

157. What would you say if the flowers need watering?

- a. Shall I order a pizza for you?
- b. Shall I iron it?
- c. Shall I turn off the radio?
- d. Shall I bring the jug?

158. What would you say if the room is too hot?

- a. Shall I turn down the heating?
- b. Shall I order a pizza for you?
- c. Shall I iron it?
- d. Shall I turn off the radio?

159. What does this sign mean?



- a. Clean your hand
- b. Keep hands out of the machine
- c. Wear gloves
- d. all are correct

160. What sign tells you should wear a hard hat?



a.


b.



c.



c. all are correct

161. What does this sign  mean?

- a. Wear beautiful shoes
- b. Safety hat must be worn
- c. Run with shoes
- d. Wear safety boot

162. ....the machine running unattended.

- a. Never leave
- b. Leave
- c. Don't make
- d. Never do

163. ....that machine guards are in position.

- a. Never check
- b. Check
- c. Never do
- d. Do

Read The advertisement about the job and choose the best answer. (For Item 164-167)



**JOB OPPORTUNITIES**  
 exist for professional in a well known  
 Fast Food Chain **SUBWAY** in **Lahore**

➤ <b>Managers</b> Qualification: Graduate / MBA	➤ <b>Sandwich Artist / Counter Staff</b> Qualification: Intermediate
➤ <b>Assistant Managers</b> Qualification: Graduate	➤ <b>Telephone Operator</b> (Preferably Females) Qualification: Intermediate
➤ <b>Accountant</b> Qualification: B.A. / B.Com	➤ <b>Riders / Cleaning Staff</b> Qualification: Min. Matric

**Drop Your CV With One Recent Photograph To**  
**89-C Jail Road, Near Race Course Park, Lahore.**  
**Mobile: 0300-8400898** [www.subway.com](http://www.subway.com)

164. What area of job is offered in the advertisement?
- Tourist industry
  - Food service
  - Marketing
  - Transportation
165. If you want to apply for the Manager position, what qualification is required?
- Intermediate level
  - MA in Food Service
  - MBA or Graduate
  - BA in Computing
166. Which position does not appear in the advertisement?
- Accountant
  - Counter Staff
  - Cleaning Staff
  - Technician
167. Where is the job?
- Near Race Course Park, Lahore
  - On the subway in Lahore
  - Near Fast Food shop in Lahore
  - Opposite to Race Course park, Lahore

Read the notice in workplace and answer the question .(For Item 168-172)

### What to do if the Fire alarm sounds

1. Follow the fire drill.
2. Keep calm and walk out of the building.
3. Leave the building by the nearest safe exit.
4. Do not use the lifts.
5. Close door behind you.
6. Do not stop to collect your things.
7. Go to your designated meeting point, and wait there.
8. Stay outside until the person in the charge tells you the building is safe.



168. What kind of text is this?

- a. A report
- b. A set of instruction
- c. News
- d. A letter

169. What should you do if the alarm sounds?

- a. Leave and go home
- b. Stay in the building
- c. Wait until someone tells you what to do
- d. Leave the building

170. Which of these things must you not do if the fire alarm sounds?

- a. Use a fire exit.
- b. Use the stairs.
- c. Use the lifts.
- d. All above.

171. Can you go back into the building if the fire alarm stops?

- a. Yes, if it looks safe.
- b. Yes, of course.
- c. No, You must wait until you are told it is safe
- d. No, You must go home.

172. Which of the following things should you always do if the fire alarm sounds?

- a. Open doors and windows.

- b. Close doors behind you.
- c. Run out of the building.
- d. All above.

173. What kind of sign is this ?



- a. Information sign
- b. Prohibition sign
- c. Warning sign
- d. Mandatory sign

174. What kind of sign is this ?



- a. Information sign
- b. Prohibition sign
- c. Warning sign
- d. Mandatory sign

175. What kind of sign is this ?



- a. Information sign
- b. Prohibition sign
- c. Warning sign
- d. Mandatory sign

176. What kind of sign is this ?





- a. Information sign
- b. Prohibition sign

- c. Warning sign
- d. Mandatory sign

177. What kind of sign is this ?



- a. Information sign
- b. Prohibition sign

- c. Warning sign
- d. Mandatory sign

